

---


---

## 6.1.3: Bisecting Angles


### Part A

Use a compass to bisect and measure the following angles. Mark equal angles.

e.g.



1.



2.




3.



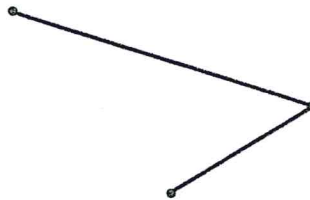
### Part B

Use a protractor to bisect and measure the following angles. Mark equal angles.

1.



2.



3.



### Part C

On the back of this sheet draw 3 different types of angles and bisect by folding paper. Mark equal angles.